

Name \_\_\_\_\_

FC  
K+

# Addition

Add the objects and numbers below. Write the sum in the space provided.




$2 + 6 =$

\_\_\_\_\_

-----

\_\_\_\_\_




$3 + 2 =$

\_\_\_\_\_

-----

\_\_\_\_\_



$4 + 3 =$

\_\_\_\_\_

-----

\_\_\_\_\_




$1 + 7 =$

\_\_\_\_\_

-----

\_\_\_\_\_



$5 + 1 =$

\_\_\_\_\_

-----

\_\_\_\_\_



FC  
K+

**Here's what to do!** Look at the picture. Circle the word that will finish the sentence. Print it on the line.

1



I got a \_\_\_\_\_ .


\_\_\_\_\_

\_\_\_\_\_

\_\_\_\_\_

- gap
- gift
- gills

2



Is it a \_\_\_\_\_ ?

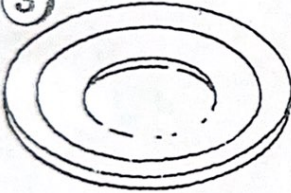
\_\_\_\_\_

\_\_\_\_\_

\_\_\_\_\_

- fill
- fan
- fish

3



Will it fit in a \_\_\_\_\_ ?

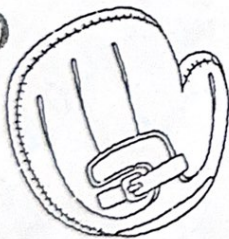
\_\_\_\_\_

\_\_\_\_\_

\_\_\_\_\_

- damp
- dig
- dish

4



Is it a bit like a \_\_\_\_\_ ?

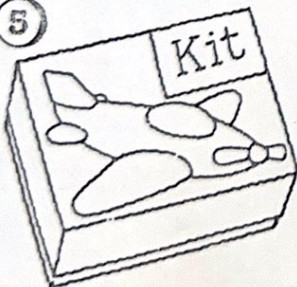
\_\_\_\_\_

\_\_\_\_\_

\_\_\_\_\_

- milk
- mitt
- tips

5



It is a \_\_\_\_\_ !

\_\_\_\_\_

\_\_\_\_\_

\_\_\_\_\_

- fist
- hill
- kit



Name \_\_\_\_\_

$$\begin{array}{r} 5 \\ +2 \\ \hline \end{array}$$

$$\begin{array}{r} 6 \\ +2 \\ \hline \end{array}$$

$$\begin{array}{r} 1 \\ +5 \\ \hline \end{array}$$

$$\begin{array}{r} 4 \\ +0 \\ \hline \end{array}$$

$$\begin{array}{r} 1 \\ +1 \\ \hline \end{array}$$

$$\begin{array}{r} 3 \\ +2 \\ \hline \end{array}$$

$$\begin{array}{r} 4 \\ +1 \\ \hline \end{array}$$

$$\begin{array}{r} 3 \\ +4 \\ \hline \end{array}$$

$$\begin{array}{r} 1 \\ +3 \\ \hline \end{array}$$

$$\begin{array}{r} 2 \\ +4 \\ \hline \end{array}$$

$$\begin{array}{r} 9 \\ +0 \\ \hline \end{array}$$

$$\begin{array}{r} 6 \\ +4 \\ \hline \end{array}$$

$$\begin{array}{r} 2 \\ +0 \\ \hline \end{array}$$

$$\begin{array}{r} 6 \\ +1 \\ \hline \end{array}$$

$$\begin{array}{r} 3 \\ +5 \\ \hline \end{array}$$

$$4 + 4 =$$

$$5 + 5 =$$

$$3 + 3 =$$

$$1 + 2 =$$

$$\begin{array}{r} 8 \\ +2 \\ \hline \end{array}$$

$$\begin{array}{r} 5 \\ +4 \\ \hline \end{array}$$

$$\begin{array}{r} 3 \\ +5 \\ \hline \end{array}$$

$$\begin{array}{r} 0 \\ +0 \\ \hline \end{array}$$

$$\begin{array}{r} 2 \\ +2 \\ \hline \end{array}$$

$$\begin{array}{r} 0 \\ +6 \\ \hline \end{array}$$

$$\begin{array}{r} 4 \\ +5 \\ \hline \end{array}$$

$$\begin{array}{r} 5 \\ +0 \\ \hline \end{array}$$

$$\begin{array}{r} 6 \\ +3 \\ \hline \end{array}$$

$$\begin{array}{r} 9 \\ +0 \\ \hline \end{array}$$

TE  
K+ FH

**Here's what to do!** Circle the word that will finish the sentence. Print it on the line.

① It was time to go at \_\_\_\_ . \_\_\_\_\_  
\_\_\_\_\_

lamp  
land  
last

② Dad and Jan got in the \_\_\_\_ . \_\_\_\_\_  
\_\_\_\_\_

can  
van  
cat

③ Dad got gas and a \_\_\_\_ . \_\_\_\_\_  
\_\_\_\_\_

lap  
nap  
map

④ Jan made a name \_\_\_\_ . \_\_\_\_\_  
\_\_\_\_\_

tag  
wag  
tan

⑤ She had fun at \_\_\_\_ ! \_\_\_\_\_  
\_\_\_\_\_

cap  
camp  
cast



Name \_\_\_\_\_

P 22

Use with text pages 53-54.

Practice the Facts

Add and match.

1. $3 + 2 =$	3	2. $0 + 1 =$	7
$7 + 1 =$	2	$4 + 1 =$	1
$0 + 3 =$	5	$5 + 1 =$	5
$1 + 1 =$	8	$6 + 1 =$	6
3. $4 + 4 =$	0	4. $2 + 0 =$	5
$0 + 0 =$	8	$0 + 5 =$	8
$2 + 2 =$	6	$5 + 3 =$	3
$3 + 3 =$	4	$1 + 2 =$	2
5. $4 + 2 =$	8	6. $3 + 1 =$	7
$2 + 3 =$	7	$3 + 4 =$	4
$3 + 5 =$	6	$1 + 4 =$	8
$1 + 6 =$	5	$2 + 6 =$	5